

Pioneer Public school (2021-2022)

Date-01/05/2021

*Day- Saturday

*Class- 4th

*Sub- Maths

Ex.-4.1 Q.no.7 do in your book.

*Class- 4th

*Sub- GK

L -04 and 05 fill in the book.

$$\begin{array}{r}
 43858 \\
 + 849762 \\
 \hline
 \end{array}
 \qquad
 \begin{array}{r}
 236540 \\
 + \\
 \hline
 \end{array}$$

7. Add: 01/05/21
(Saturday).

(a)

$$\begin{array}{r}
 23678 \\
 + 14972 \\
 + 55035 \\
 \hline
 \end{array}$$

(b)

$$\begin{array}{r}
 468024 \\
 + 135791 \\
 + 56789 \\
 \hline
 \end{array}$$

(c) (doin book)

$$\begin{array}{r}
 12345 \\
 + 54325 \\
 + 445678 \\
 \hline
 \end{array}$$

(d)

$$\begin{array}{r}
 56784 \\
 + 7654 \\
 + 454 \\
 \hline
 \end{array}$$

(e)

$$\begin{array}{r}
 4567 \\
 34567 \\
 + 234567 \\
 \hline
 \end{array}$$


(f)

$$\begin{array}{r}
 24680 \\
 + 678900 \\
 + 213140 \\
 \hline
 \end{array}$$

4 States of Matter

All things in this world are made up of matter. Matter exists in three different states. They are – solid, liquid and gas. All things can be found in these three states.

Solid States




Liquid States





Gaseous States




A. In which state are these things found? Write 'S' for solid, 'L' for liquid and 'G' for gas :

1. 
 Monitor

2. 
 Wind from fan

3. 
 Steam

4. 
 Rain

5 Edibles



The Earth gives us various edibles. They give us energy to work and provide nutrients keep us healthy.

Recognize the following edibles and write their names :



1 Cloves



2 Rice



3 Turmeric



4 Bajra



5 Chick Peas



6 Mustard



7 Wheat



8 Corn



9 Red kidney bean



10 Peppen



11 Green Gram



12 Groundnut



13 Cinnamon






14 Sesame

Info Zone

Cereals are sometimes called staple foods, they are usually grains. They can be ground into flour.

Clue Corner

Wheat, groundnut, green gram, rice, bajra, cloves, red kidney bean, turmeric, sesame, pepper, mustard, chickpeas, corn, cinnamon



B. Solids, liquids and gases have some common and some special properties. Put a tick (✓) in the right columns for each property :

Properties	Solids	Liquids	Gases
1. have a fixed shape and volume			✓
2. have no fixed shape		✓	
3. take the shape of their container		✓	
4. can always be seen	✓	✓	
5. flow from a higher to a lower level		✓	
6. can flow or spread in all directions			✓
7. can be squeezed into a small space like a bicycle wheel			✓

Info ZONE

Thermometers are filled with a shiny and silver liquid metal called mercury. It is a metal as well as liquid too.

Now Test Yourself

1. Give two examples of solids :

Table

Chair

2. Give two examples of liquids :

Milk

Water

3. Give two examples of gases :

LPG

Oxygen

Overall Grading

Poor

Average

Excellent